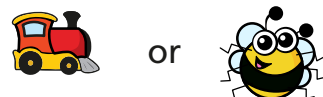


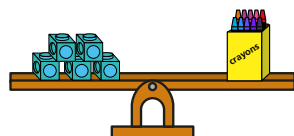
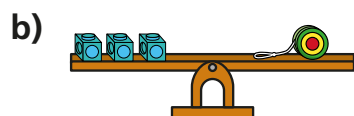
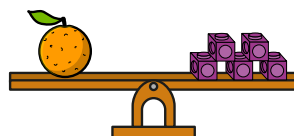


1 Which object is heavier?



2 Look at the scales.



Choose a word to complete each sentence.

heavier

lighter

a) The orange is _____ than the cherries.


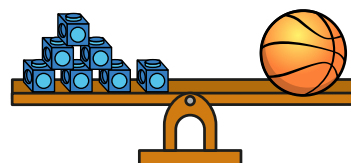
b) The apple is _____ than the orange.

c) The cherries are _____ than the apple.

d) The apple is _____ than the cherries.

3 The basketball is heavier than the football.

Draw cubes to complete the scales.



Is there more than one answer?